



RAKAMLARIN ÜZERİNDEN GEÇELİM




0 0 0 0




1 1 1 1



2 2 2 2








3 3 3 3



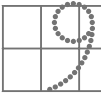
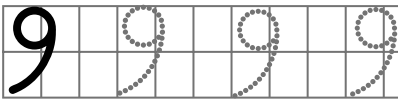
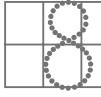


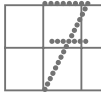
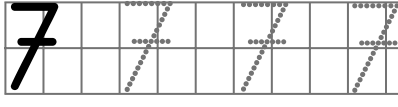

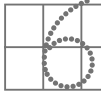
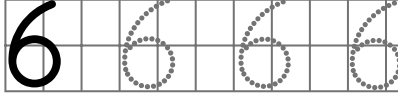

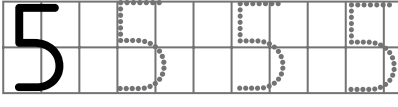

4 4 4 4








► Aşağıdaki nesnelere sayalım. Kaç tane olduklarını altlarındaki kutuya yazalım.



RAKAMLARIN ÜZERİNDEN GEÇELİM



► Aşağıdaki nesnelere sayalım. Kaç tane olduklarını altlarındaki kutuya yazalım.



RAKAMLARIN ÜZERİNDEN GEÇELİM

10

10 10 10 10

10

10

11

11 11 11 11

11

11







12

12 12 12 12

12

12

► Aşağıdaki nesnelere sayalım. Kaç tane olduklarını altlarındaki kutuya yazalım.



RAKAMLARIN ÜZERİNDEN GEÇELİM

13

13 13 13 13

13

13

14

14 14 14 14

14

14

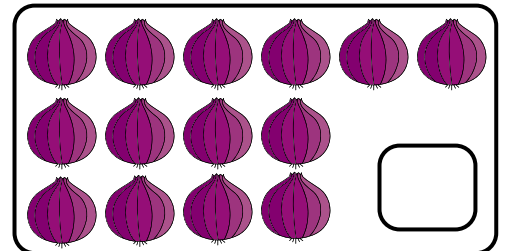


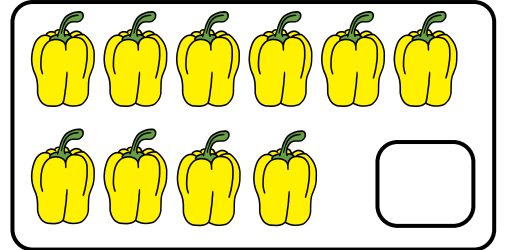


15

15 15 15 15

15

15

► Aşağıdaki nesnelere sayalım. Kaç tane olduklarını altlarındaki kutuya yazalım.



RAKAMLARIN ÜZERİNDEN GEÇELİM

16

16 16 16 16

16

16

17

17 17 17 17

17

17






18

18 18 18 18

18

18

► Aşağıdaki nesnelere sayalım. Kaç tane olduklarını altlarındaki kutuya yazalım.



RAKAMLARIN ÜZERİNDEN GEÇELİM

19

19 19 19 19

19

19

20

20 20 20 20

20

20

► Aşağıdaki nesnelere sayalım. Kaç tane olduklarını altlarındaki kutuya yazalım.

