

Aşağıdaki varlıkların kütlelerini tahmin ederek uygun olan ölçüyü boyayalım.



80 g

80 kg



25 kg

25 g



15g

15 kg



4 kg

40 g



10 g

10 kg




60 kg

60 g




5 kg

5 g




90 g

9 kg




1 kg

10 g



4 g

4 kg



8 kg

80 g



20 g

20 kg




50 g

50 kg



70 kg

70 g



80 g

80 kg



95 kg

95 g



65 kg

65 g



3 kg

3 g



10 g

10 kg



7 kg

7 g

Aşağıdaki varlıkların kütlelerini tahmin ederek uygun olan ölçüyü boyayalım.

