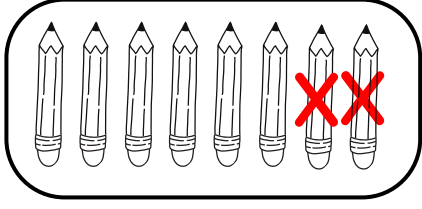
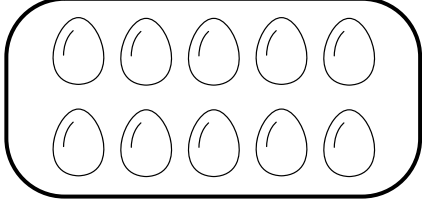


A) Aşağıdaki işlemleri örnekteki gibi yapalım.



2 tane kalemimi
kaybettim.
Kaç tane kaldı?

$$\begin{array}{r} 8 \\ - 2 \\ \hline 6 \end{array}$$



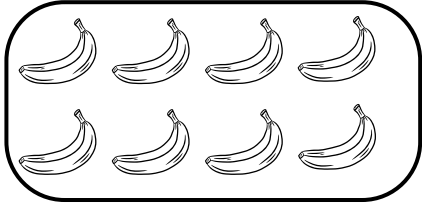
5 tane yumurta
kırıldı.
Kaç tane kaldı?

$$\begin{array}{r} \square \\ - \square \\ \hline \square \end{array}$$



6 tane kuş
uçtu.
Kaç tane kaldı?


$$\begin{array}{r} \square \\ - \square \\ \hline \square \end{array}$$



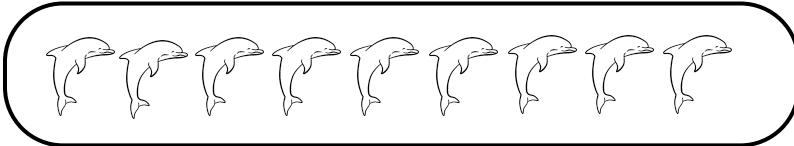
4 tane muzu
yedik.
Kaç tane kaldı?

$$\begin{array}{r} \square \\ - \square \\ \hline \square \end{array}$$


B) Aşağıdaki işlemleri örnekteki gibi yapalım.




$$10 - 3 = \boxed{7}$$



$$9 - 3 = \square$$

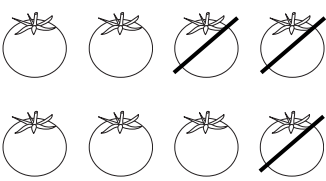


$$8 - 5 = \square$$




$$10 - 8 = \square$$

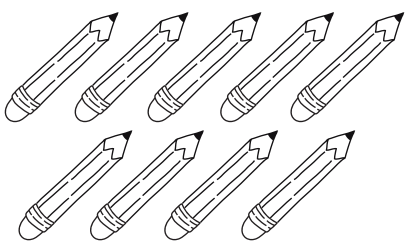
C) Aşağıdaki işlemleri örnekteki gibi yapalım.




$8 - 3 = \square$




$7 - 6 = \square$



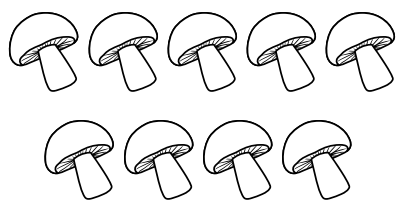
$9 - 4 = \square$




$8 - 5 = \square$




$6 - 2 = \square$




$9 - 7 = \square$



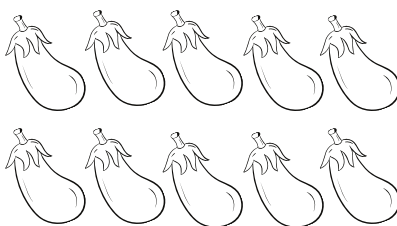
$7 - 5 = \square$



$4 - 1 = \square$



$5 - 3 = \square$



$10 - 2 = \square$