

Aşağıdaki kutulara dörder ritmik sayarak yazalım.

4									
---	--	--	--	--	--	--	--	--	--

Aşağıda toplama işlemi ile verilenleri çarpma işlemi ile ifade edelim.

$$4 + 4 + 4 + 4 + 4 + 4 + 4 + 4$$

$$8 \times 4 = 32$$

$$4 + 4 + 4 + 4 + 4$$

$$\times =$$

$$4 + 4 + 4 + 4 + 4 + 4 + 4 + 4 + 4 + 4$$

$$\times =$$

$$4 + 4 + 4 + 4 + 4 + 4 + 4$$

$$\times =$$

$$4 + 4 + 4$$

$$\times =$$

$$4 + 4 + 4 + 4 + 4 + 4$$

$$\times =$$

$$4 + 4$$

$$\times =$$

$$4 + 4 + 4 + 4 + 4 + 4 + 4 + 4 + 4$$

$$\times =$$

$$4$$

$$\times =$$

$$4 + 4 + 4 + 4$$

$$\times =$$

Aşağıdaki çarpma işlemlerini yapalım.

$$\begin{array}{r} 5 \\ \times 4 \\ \hline \end{array}$$

$$\begin{array}{r} 3 \\ \times 4 \\ \hline \end{array}$$

$$\begin{array}{r} 7 \\ \times 4 \\ \hline \end{array}$$

$$\begin{array}{r} 10 \\ \times 4 \\ \hline \end{array}$$

$$\begin{array}{r} 1 \\ \times 4 \\ \hline \end{array}$$

$$\begin{array}{r} 9 \\ \times 4 \\ \hline \end{array}$$

$$\begin{array}{r} 4 \\ \times 4 \\ \hline \end{array}$$

$$\begin{array}{r} 8 \\ \times 4 \\ \hline \end{array}$$





$$\begin{array}{r} 2 \\ \times 4 \\ \hline \end{array}$$

$$\begin{array}{r} 6 \\ \times 4 \\ \hline \end{array}$$

Aşağıdaki kutulara dörder ritmik sayarak yazalım.

4

Görselleri inceleyelim, çarpma işlemi olarak ifade edelim.

	$1 \times 4 = 4$
	$\square \times \square = \square$
	$\square \times \square = \square$
	$\square \times \square = \square$
	$\square \times \square = \square$
	$\square \times \square = \square$
	$\square \times \square = \square$
	$\square \times \square = \square$
	$\square \times \square = \square$
	$\square \times \square = \square$

Aşağıdaki çarpma işlemlerini yapalım.

$$\begin{array}{r} 3 \\ \times 4 \\ \hline \end{array}$$

$$\begin{array}{r} 2 \\ \times 4 \\ \hline \end{array}$$

$$\begin{array}{r} 9 \\ \times 4 \\ \hline \end{array}$$

$$\begin{array}{r} 1 \\ \times 4 \\ \hline \end{array}$$

$$\begin{array}{r} 7 \\ \times 4 \\ \hline \end{array}$$

$$\begin{array}{r} 4 \\ \times 4 \\ \hline \end{array}$$

$$\begin{array}{r} 10 \\ \times 4 \\ \hline \end{array}$$

$$\begin{array}{r} 8 \\ \times 4 \\ \hline \end{array}$$

$$\begin{array}{r} 6 \\ \times 4 \\ \hline \end{array}$$

$$\begin{array}{r} 5 \\ \times 4 \\ \hline \end{array}$$