


# KESİRLER



➔ Aşağıdaki kesirleri örnekteki gibi sayı doğrusunda gösterelim.

$$\frac{1}{3}$$



$$\frac{2}{6}$$



$$\frac{3}{4}$$



$$\frac{6}{8}$$




$$\frac{4}{5}$$




$$\frac{3}{7}$$



$$\frac{2}{3}$$



$$\frac{5}{6}$$



➔ Aşağıdaki sayı doğrusunda gösterilen kesirlerin değerlerini yazalım.

